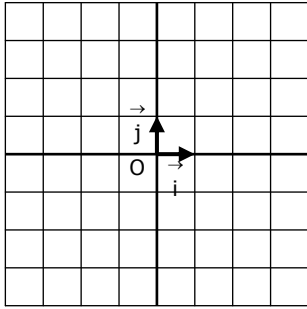


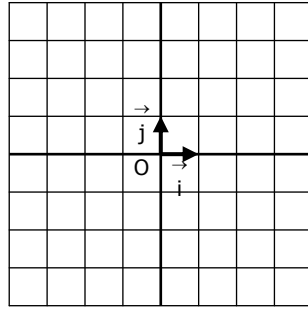
Construire la droite représentant chaque fonction affine :

1.



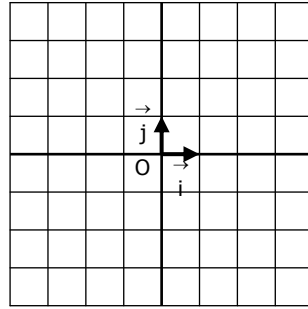
$$f: x \mapsto 2x + 1$$

2.



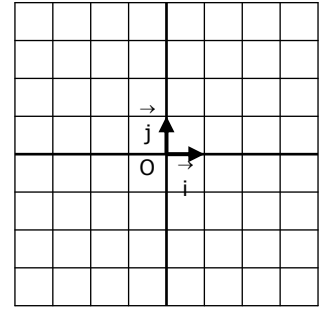
$$f: x \mapsto -x + 3$$

3.



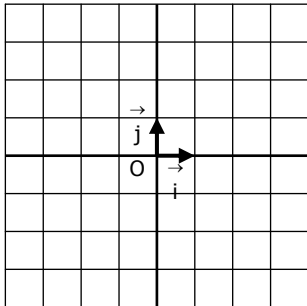
$$f: x \mapsto 2x - 3$$

4.



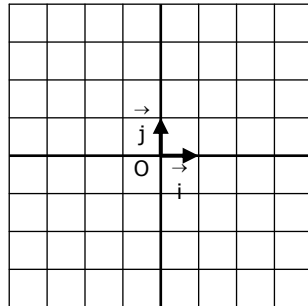
$$f: x \mapsto x - 2$$

5.



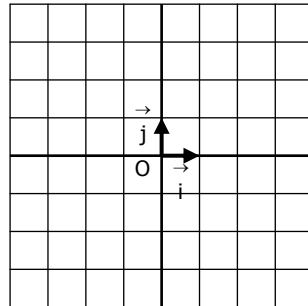
$$f: x \mapsto 3x$$

6.



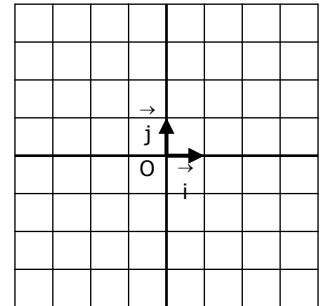
$$f: x \mapsto -4x + 3$$

7.



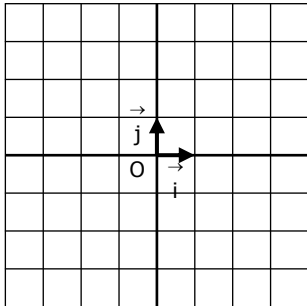
$$f: x \mapsto -2x - 3$$

8.



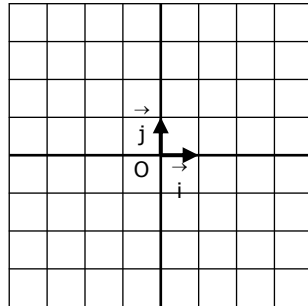
$$f: x \mapsto 5x - 4$$

9.



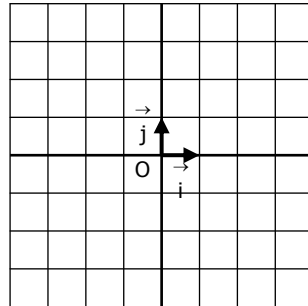
$$f: x \mapsto -4x - 4$$

10.



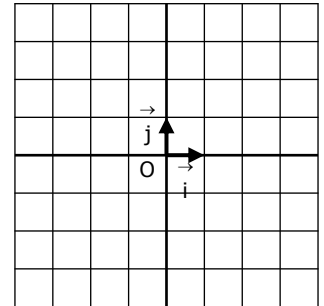
$$f: x \mapsto \frac{1}{2}x$$

11.



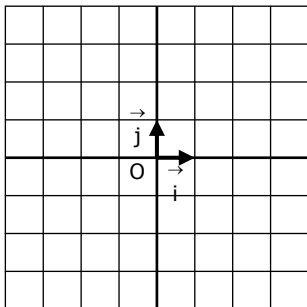
$$f: x \mapsto \frac{3}{2}x - 2$$

12.



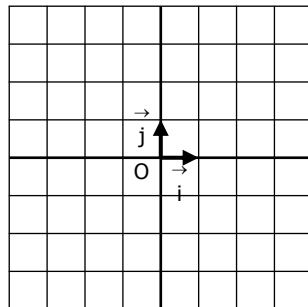
$$f: x \mapsto -\frac{1}{2}x + 1$$

13.



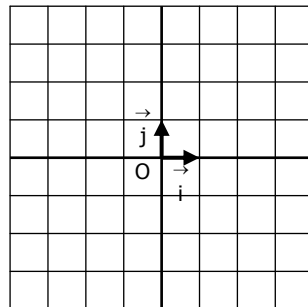
$$f: x \mapsto \frac{2}{3}x - 1$$

14.



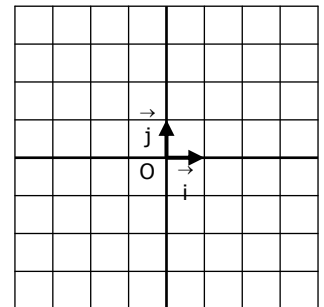
$$f: x \mapsto -\frac{5}{4}x + 4$$

15.



$$f: x \mapsto -\frac{4}{3}x + 1$$

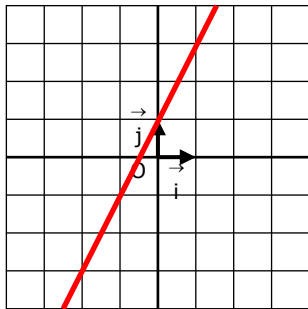
16.



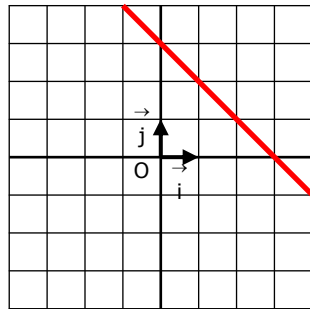
$$f: x \mapsto 3$$

CORRIGE – Notre Dame de La Merci – Montpellier

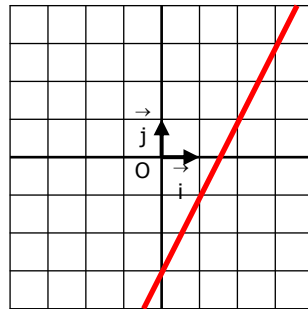
Construire la droite représentant chaque fonction affine :

1.

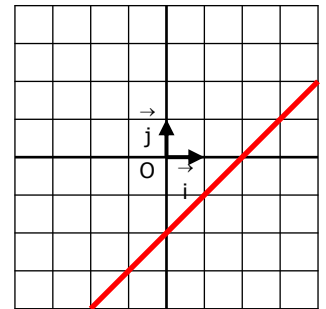
$$f: x \mapsto 2x + 1$$

2.

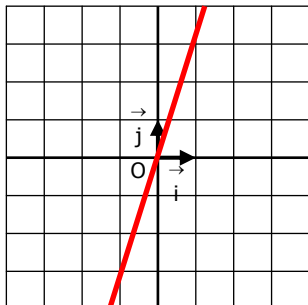
$$f: x \mapsto -x + 3$$

3.

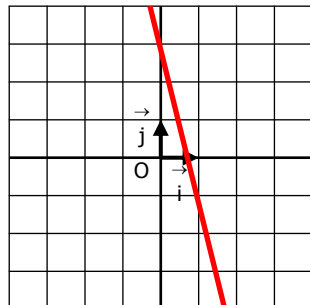
$$f: x \mapsto 2x - 3$$

4.

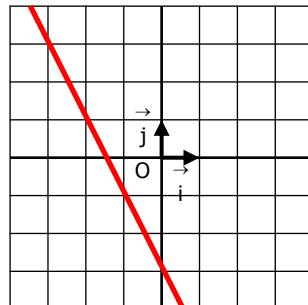
$$f: x \mapsto x - 2$$

5.

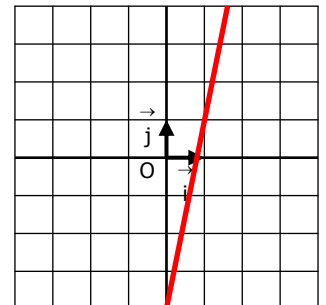
$$f: x \mapsto 3x$$

6.

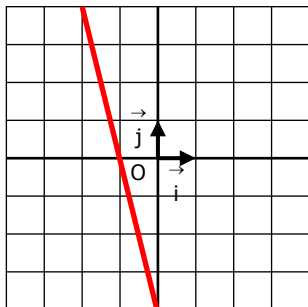
$$f: x \mapsto -4x + 3$$

7.

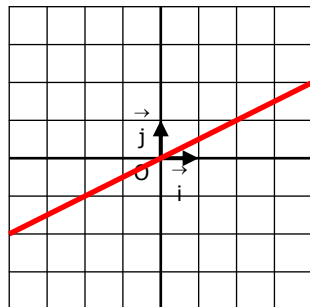
$$f: x \mapsto -2x - 3$$

8.

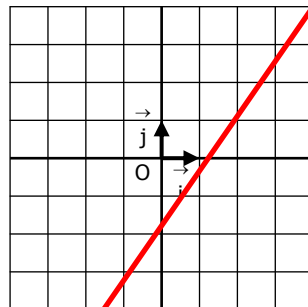
$$f: x \mapsto 5x - 4$$

9.

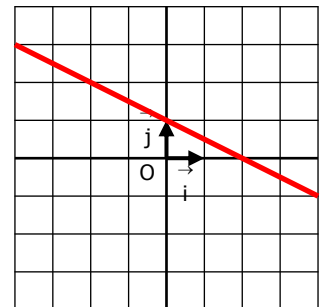
$$f: x \mapsto -4x - 4$$

10.

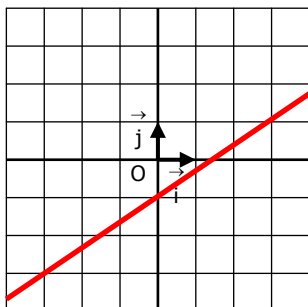
$$f: x \mapsto \frac{1}{2}x$$

11.

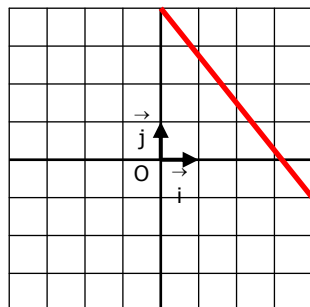
$$f: x \mapsto \frac{3}{2}x - 2$$

12.

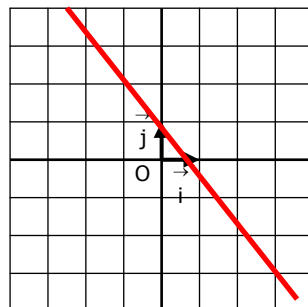
$$f: x \mapsto -\frac{1}{2}x + 1$$

13.

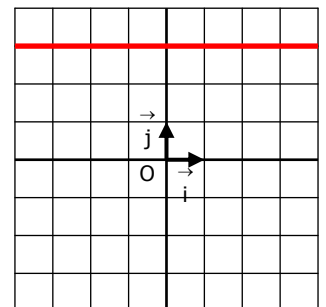
$$f: x \mapsto \frac{2}{3}x - 1$$

14.

$$f: x \mapsto -\frac{5}{4}x + 4$$

15.

$$f: x \mapsto -\frac{4}{3}x + 1$$

16.

$$f: x \mapsto 3$$