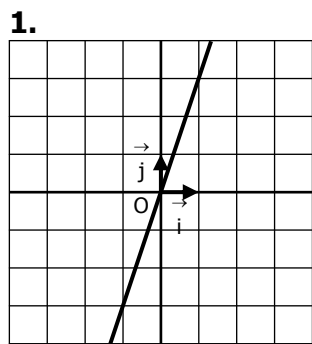
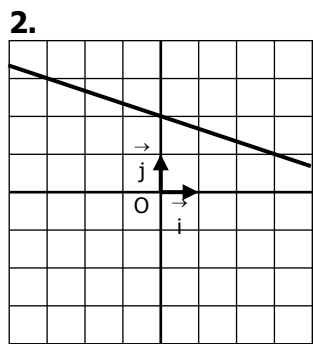


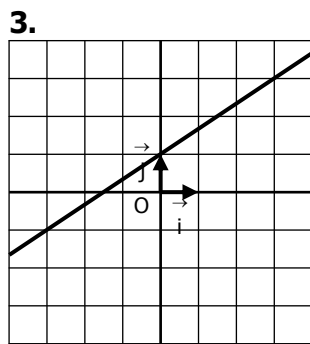
Déterminer graphiquement l'expression de la fonction affine dont on a tracé la courbe :



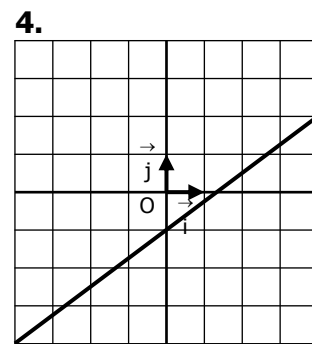
$f: x \mapsto \dots\dots\dots$



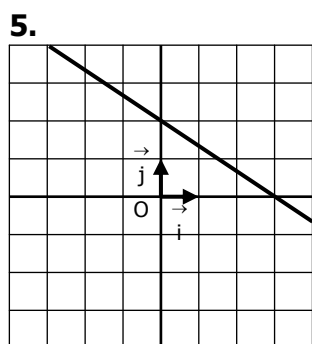
$f: x \mapsto \dots\dots\dots$



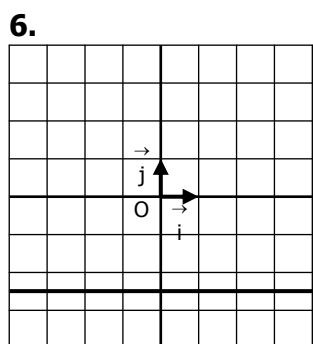
$f: x \mapsto \dots\dots\dots$



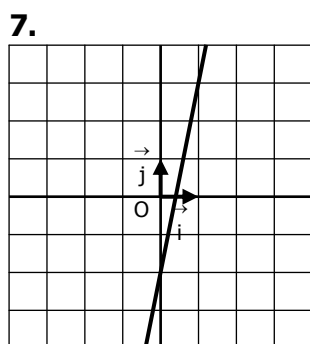
$f: x \mapsto \dots\dots\dots$



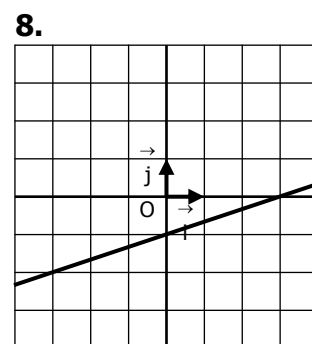
$f: x \mapsto \dots\dots\dots$



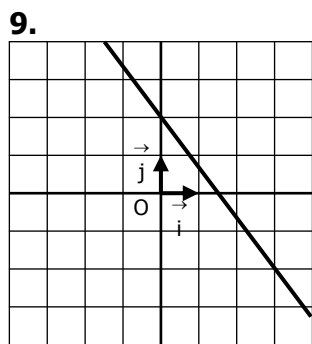
$f: x \mapsto \dots\dots\dots$



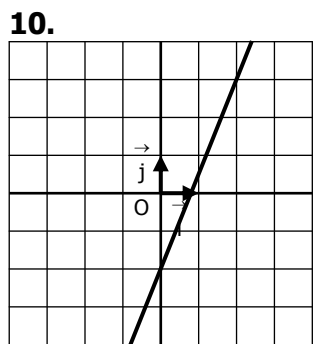
$f: x \mapsto \dots\dots\dots$



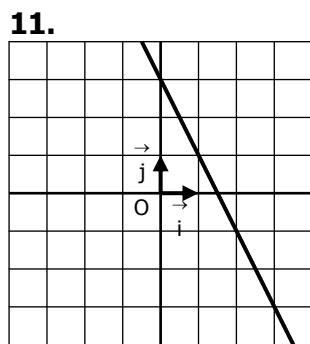
$f: x \mapsto \dots\dots\dots$



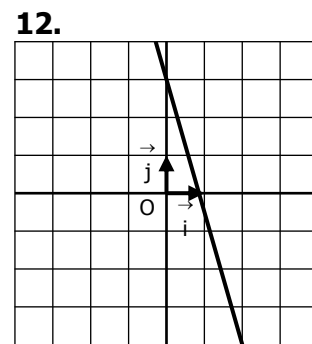
$f: x \mapsto \dots\dots\dots$



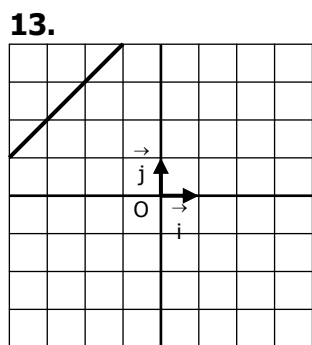
$f: x \mapsto \dots\dots\dots$



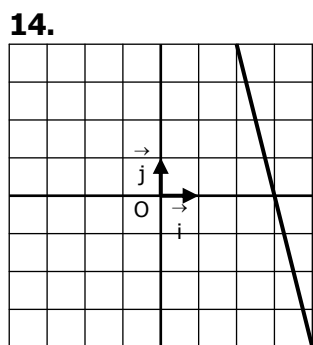
$f: x \mapsto \dots\dots\dots$



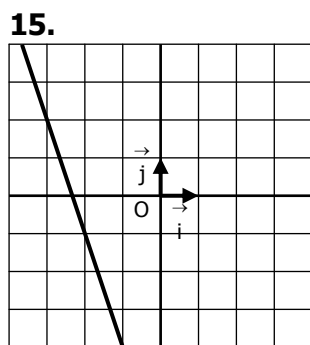
$f: x \mapsto \dots\dots\dots$



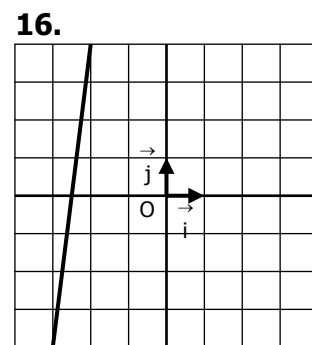
$f: x \mapsto \dots\dots\dots$



$f: x \mapsto \dots\dots\dots$



$f: x \mapsto \dots\dots\dots$

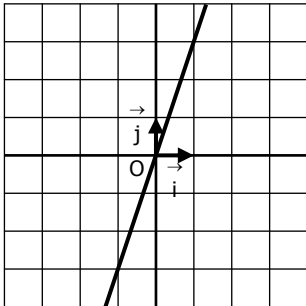


$f: x \mapsto \dots\dots\dots$

**CORRIGE – Notre Dame de La Merci – Montpellier**

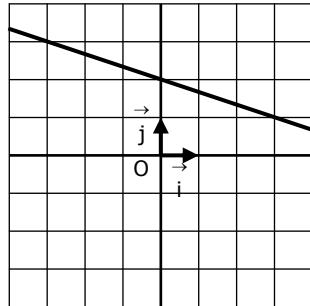
Déterminer graphiquement l'expression de la fonction affine dont on a tracé la courbe :

1.



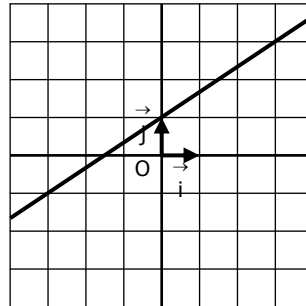
$$f : x \mapsto 3x$$

2.



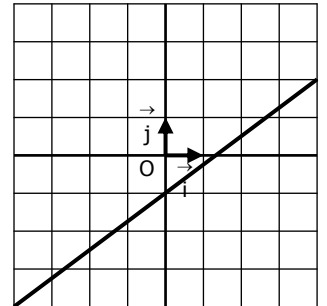
$$f : x \mapsto -\frac{1}{4}x + 2$$

3.



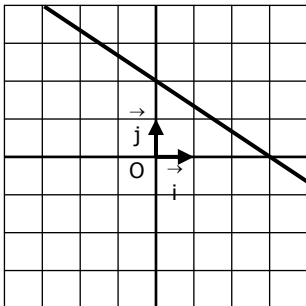
$$f : x \mapsto \frac{2}{3}x + 1$$

4.



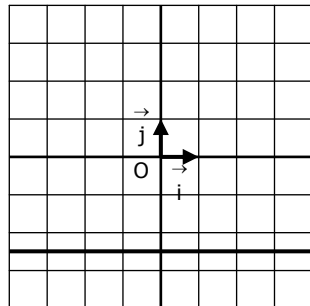
$$f : x \mapsto \frac{3}{5}x - 1$$

5.



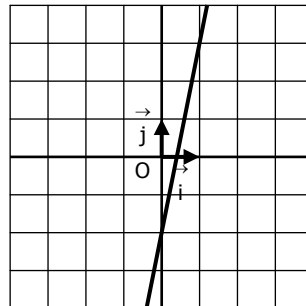
$$f : x \mapsto -\frac{2}{3}x + 2$$

6.



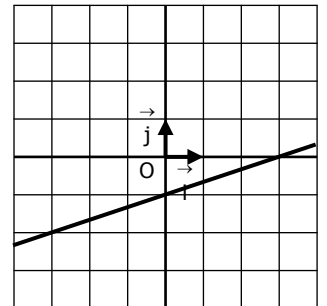
$$f : x \mapsto -\frac{5}{2}$$

7.



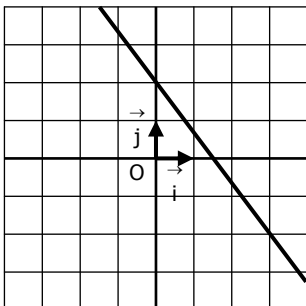
$$f : x \mapsto 5x - 2$$

8.



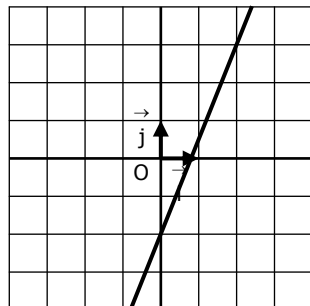
$$f : x \mapsto \frac{1}{3}x - 1$$

9.



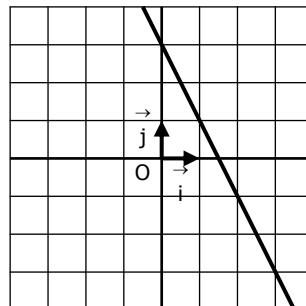
$$f : x \mapsto -\frac{4}{3}x + 2$$

10.



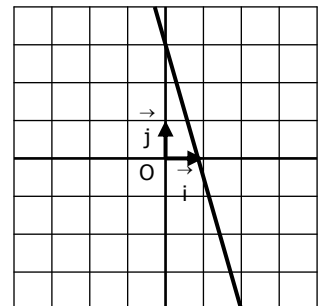
$$f : x \mapsto \frac{5}{2}x - 2$$

11.



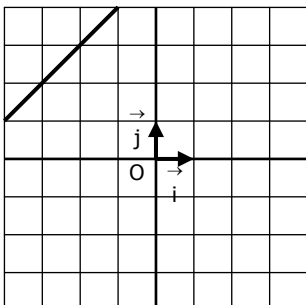
$$f : x \mapsto -2x + 3$$

12.



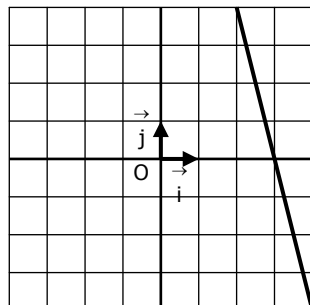
$$f : x \mapsto -\frac{7}{2}x + 3$$

13.



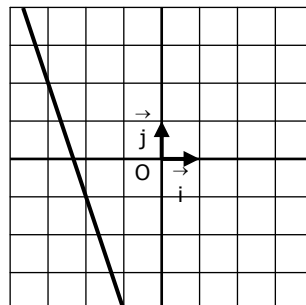
$$f : x \mapsto x + 5$$

14.



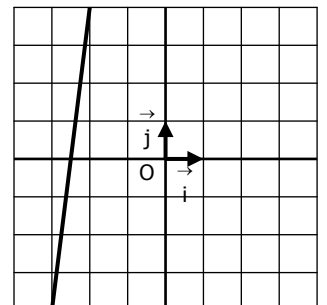
$$f : x \mapsto -4x + 12$$

15.



$$f : x \mapsto -3x - 7$$

16.



$$f : x \mapsto 8x + 20$$

